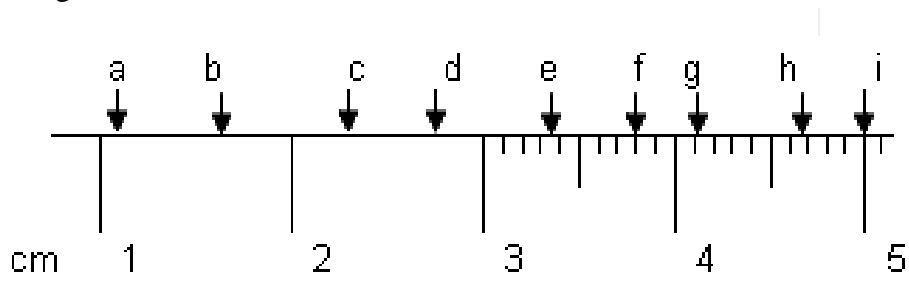


Name \_\_\_\_\_

## Measurement

Determine the values of the following measurements. Include uncertainty.

Length:



a) \_\_\_\_\_

d) \_\_\_\_\_

g) \_\_\_\_\_

b) \_\_\_\_\_

e) \_\_\_\_\_

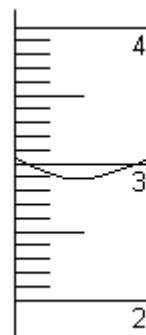
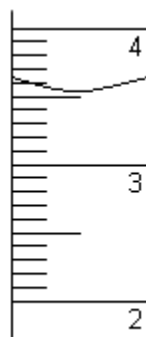
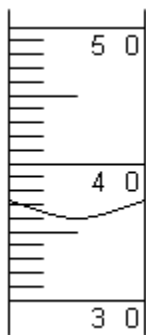
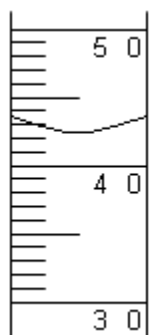
h) \_\_\_\_\_

c) \_\_\_\_\_

f) \_\_\_\_\_

i) \_\_\_\_\_

Volume mL:



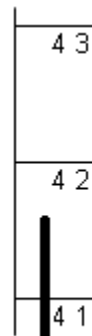
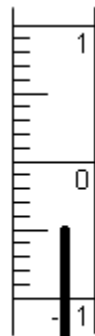
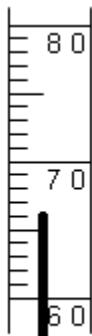
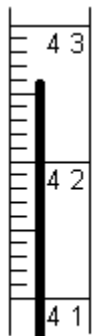
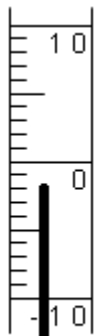
j) \_\_\_\_\_

k) \_\_\_\_\_

l) \_\_\_\_\_

m) \_\_\_\_\_

Temperature °C:



n) \_\_\_\_\_

o) \_\_\_\_\_

p) \_\_\_\_\_

q) \_\_\_\_\_

r) \_\_\_\_\_